

BIG IDEA

In meiosis, genetic material from two parent organisms results in offspring with traits that follow a pattern of inheritance.

6.1 Chromosomes and Meiosis **TEKS** 6A, 6G

Data Analysis

INTERPRETING BAR GRAPHS **TEKS** 2G

6.2 Process of Meiosis **TEKS** 6G

6.3 Mendel and Heredity **TEKS** 3F, 6F

6.4 Traits, Genes, and Alleles **TEKS** 6A, 6F

6.5 Traits and Probability **TEKS** 3F, 6F, 6G

6.6 Meiosis and Genetic Variation

TEKS 6F, 6G



ONLINE BIOLOGY

HMDSscience.com

ONLINE Labs

- **QuickLab** Using a Testcross
- Allele Combinations and Punnett Squares
- Modeling Meiosis
- **S.T.E.M. Lab** Modeling Chromosomes in Meiosis
- Probability Practice
- Modeling Monohybrid and Dihybrid Crosses
- **Virtual Lab** Breeding Mutations in Fruit Flies
- **Video Lab** Meiosis Model

Q What makes you who you are?

The human egg and sperm cells (left) are the result of meiosis, a process that reduces a cell's chromosome number by half. Millions of sperm could potentially fertilize the egg, but only one actually succeeds. The fusion of egg and sperm triggers a series of events that lead to the development of a healthy new organism displaying features of both the mother and the father.



READING TOOLBOX

This reading tool can help you learn the material in the following pages.

USING LANGUAGE

Comparisons Comparing is a way of looking for the similarities between different things. Contrasting is a way of looking for differences. Certain words and phrases can help you determine if things are being compared or contrasted. Comparison words include *and*, *like*, *just as*, and *in the same way*. Contrast words include *however*, *unlike*, *in contrast*, and *on the other hand*.

YOUR TURN

In the following sentences, find the things that are being compared or contrasted.

1. Like mitosis, meiosis is a process that reproduces new cells.
2. In contrast to many other reptiles, the Burmese python does not reproduce sexually.



6.1

Chromosomes and Meiosis

TEKS 6A, 6G

VOCABULARY

- somatic cell
- gamete
- homologous chromosome
- autosome
- sex chromosome
- sexual reproduction
- fertilization
- diploid
- haploid
- meiosis

TEKS 6A identify components of DNA, and describe how information for specifying the traits of an organism is carried in the DNA and **6G** recognize the significance of meiosis to sexual reproduction

KEY CONCEPT Gametes have half the number of chromosomes that body cells have.

MAIN IDEAS

- ▶ You have body cells and gametes.
- ▶ Your cells have autosomes and sex chromosomes.
- ▶ Body cells are diploid; gametes are haploid.

Connect to Your World

Perhaps you are familiar with the saying, “Everything old is new again.” This phrase usually indicates that a past style is again current. However, it applies equally well to you. The fusion of a single egg and sperm cell resulted in the complex creature that is you. There’s never been anyone quite like you. And yet the DNA that directs your cells came from your mother and father. And their DNA came from their mother and father, and so on and so on. In this chapter, you will examine the processes that went into making you who you are.

▶ MAIN IDEA **TEKS 6A**

You have body cells and gametes.

You have many types of specialized cells in your body, but they can be divided into two major groups: somatic cells and germ cells. **Somatic cells** (soh-MAT-ihk), also called body cells, make up most of your body tissues and organs. For example, your spleen, kidneys, and eyeballs are all made entirely of body cells. DNA in your body cells is not passed on to your children. Germ cells, in contrast, are cells in your reproductive organs, the ovaries or the testes, that develop into gametes. **Gametes** are sex cells—ova, or eggs, in the female, and spermatozoa, or sperm cells, in the male. DNA in your gametes can be passed on to your children.

Each species has a characteristic number of chromosomes per cell. This number is typically given for body cells, not for gametes. Chromosome number does not seem to be related to the complexity of an organism. For example, yeast have 32 chromosomes, which come in 16 pairs. The fruit flies commonly used in genetic experiments have 8 chromosomes, which come in 4 pairs. A fern holds the record for the most chromosomes—more than 1200. Each of your body cells contains a set of 46 chromosomes, which come in 23 pairs. These cells are genetically identical to each other unless mutations have occurred. As you have learned, cells within an organism differ from one another because different genes are expressed, not because they have different genes.

Identify Which cell type makes up the brain?

READING TOOLBOX

TAKING NOTES

Make a two-column table to keep track of the vocabulary in this chapter.

Term	Definition
somatic cell	
gamete	

MAIN IDEA **TEKS 6A**

Your cells have autosomes and sex chromosomes.

Suppose you had 23 pairs of gloves. You would have a total of 46 gloves that you could divide into two sets, 23 right and 23 left. Similarly, your body cells have 23 pairs of chromosomes for a total of 46 that can be divided into two sets: 23 from your mother and 23 from your father. Just as you use both gloves when it's cold outside, your cells use both sets of chromosomes to function properly.

Together, each pair of chromosomes is referred to as a homologous pair. In this context, the word *homologous* means “having the same structure.” **Homologous chromosomes** are two chromosomes—one inherited from the mother, one from the father—that have the same length and general appearance. More importantly, these chromosomes have copies of the same genes, although the two copies may differ. For example, if you have a gene that influences blood cholesterol levels on chromosome 8, you will have one copy from your mother and one copy from your father. It is possible that one of these copies is associated with high cholesterol levels, while the other is associated with low cholesterol levels. For convenience, scientists have assigned a number to each pair of homologous chromosomes, ordered from largest to smallest. As **FIGURE 1.1** shows, the largest pair of chromosomes is number 1, the next largest pair is number 2, and so forth.

Collectively, chromosome pairs 1 through 22 make up your **autosomes**, chromosomes that contain genes for characteristics not directly related to the sex of an organism. But what about the 23rd chromosome pair?

Most sexually reproducing species also have **sex chromosomes** that directly control the development of sexual characteristics. Humans have two very different sex chromosomes, X and Y. How sex is determined varies by species. In all mammals, including humans, an organism's sex is determined by the XY system. An organism with two X chromosomes is female. An organism with one X and one Y chromosome is male. Sex chromosomes make up your 23rd pair of chromosomes. Although the X and Y chromosomes pair with each other, they are not homologous. The X chromosome is the larger sex chromosome and contains numerous genes, including many that are unrelated to sexual characteristics. The Y chromosome is the sex chromosome that contains genes that direct the development of the testes and other male traits. It is the smallest chromosome and carries the fewest genes.

Summarize Are homologous chromosomes identical to each other? Explain.

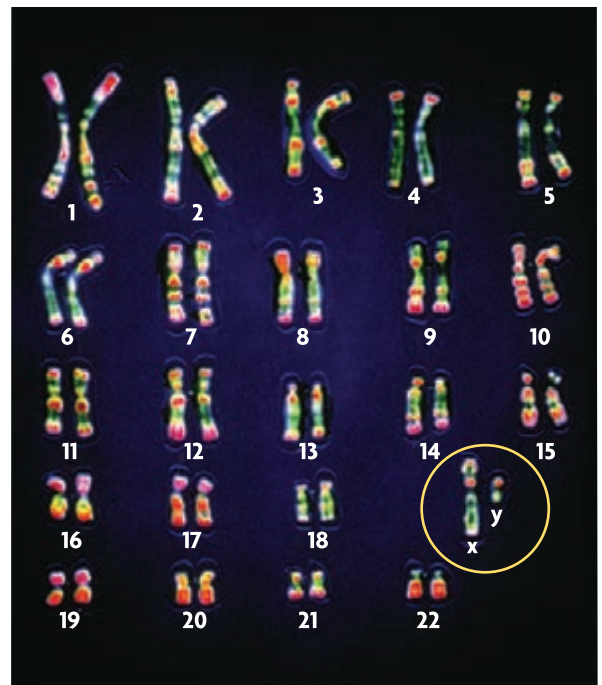



FIGURE 1.1 Human DNA is organized into two sets of 23 chromosomes. Each set contains 22 autosomes and 1 sex chromosome. Females have two X chromosomes. Males have an X and a Y chromosome (circled). (colored LM; magnification 4400×)



Body cells are diploid; gametes are haploid.

Sexual reproduction involves the fusion of two gametes, resulting in offspring that are a genetic mixture of both parents. The actual fusion of an egg and a sperm cell is called **fertilization**. When fertilization occurs, the nuclei of the egg and sperm cell fuse to form one nucleus. This new nucleus must have the correct number of chromosomes for a healthy new organism to develop. Therefore, both the egg and the sperm cell need only half the usual number of chromosomes—one chromosome from each homologous pair.

Diploid and Haploid Cells

Body cells and gametes have different numbers of chromosomes. Your body cells are diploid. **Diploid** (DIHP-LOYD) means that a cell has two copies of each chromosome: one copy from the mother, and one copy from the father. Diploid cells can be represented as $2n$. In humans, the diploid chromosome number is 46.

Gametes are not diploid cells; they are haploid cells, represented as n .

Haploid (HAP-LOYD) means that a cell has only one copy of each chromosome. Each human egg or sperm cell has 22 autosomes and 1 sex chromosome. In the egg, the sex chromosome is always an X chromosome. In the sperm cell, the sex chromosome can be an X chromosome or a Y chromosome. The reason for this difference will be discussed in the following sections.

Maintaining the correct number of chromosomes is important to the survival of all organisms. Typically, a change in chromosome number is harmful. However, increasing the number of sets of chromosomes can, on occasion, give rise to a new species. The fertilization of nonhaploid gametes has played an important role in plant evolution by rapidly making new species with more than two sets of chromosomes. For example, some plants have four copies of each chromosome, a condition called tetraploidy ($4n$). This type of event has occurred in many groups of plants, but it is very rare in animals.

Meiosis

Germ cells in your reproductive organs undergo the process of meiosis to form gametes. **Meiosis** (my-OH-sihs) is a form of nuclear division that divides a diploid cell into haploid cells. This process is essential for sexual reproduction. The details of meiosis will be presented in the next section. **FIGURE 1.2** highlights some differences between mitosis and meiosis in advance to help you keep these two processes clear in your mind.

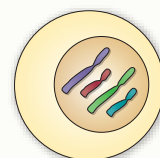
READING TOOLBOX

VOCABULARY

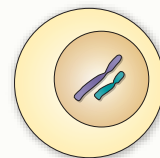
The word *diploid* comes from the Greek word *diploous*, which means “double.” The word *haploid* comes from the Greek word *haplous*, which means “single.”

VISUAL VOCAB

Diploid cells have two copies of each chromosome: one copy from the mother and one from the father.



Body cells are diploid ($2n$).



Gametes (sex cells) are haploid (n).

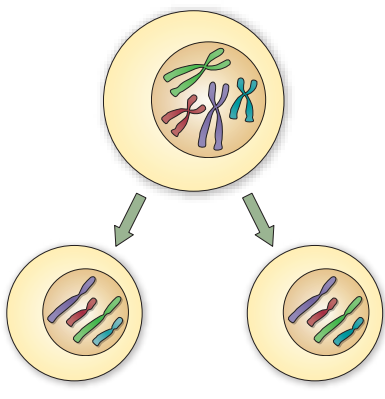
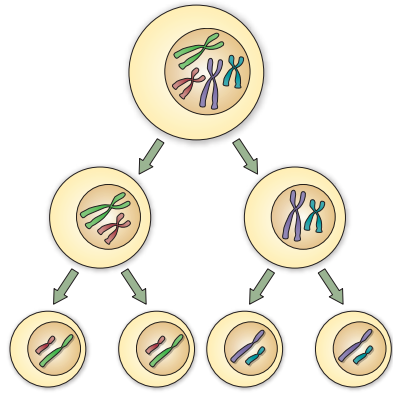
Haploid cells have only one copy of each chromosome.

CONNECT TO

PLANT LIFE CYCLES

As you will learn in the chapter **Plant Growth, Reproduction, and Response**, all plants complete their life cycle by alternating between two phases: diploid and haploid. During the diploid phase, plants make spores. During the haploid phase, plants make gametes.

FIGURE 1.2 Comparing Mitosis and Meiosis

MITOSIS		MEIOSIS	
	Produces genetically identical cells		Produces genetically unique cells
	Results in diploid cells		Results in haploid cells
	Takes place throughout an organism's lifetime		Takes place only at certain times in an organism's life cycle
	Involved in asexual reproduction		Involved in sexual reproduction

Compare Using the diagrams above, explain how you think the process of meiosis differs from mitosis. **TEKS 6G**

You have already learned about mitosis, another form of nuclear division. Recall that mitosis is a process that occurs in body cells. It helps produce daughter cells that are genetically identical to the parent cell. In cells undergoing mitosis, DNA is copied once and divided once. Both the parent cell and the daughter cells are diploid. Mitosis is used for development, growth, and repair in all types of organisms. It is also used for reproduction in asexually reproducing eukaryotes.

In contrast, meiosis occurs in germ cells to produce gametes. This process is sometimes called a “reduction division” because it reduces a cell’s chromosome number by half. In cells undergoing meiosis, DNA is copied once but divided twice. Meiosis makes genetically unique haploid cells from a diploid cell. These haploid cells then undergo more processing in the ovaries or testes, finally forming mature gametes.

Apply Why is it important that gametes are haploid cells?

6.1 Formative Assessment

REVIEWING MAIN IDEAS

- Where are germ cells located in the human body?
- What is the difference between an **autosome** and a **sex chromosome**?
- Is the cell that results from **fertilization** a **haploid** or **diploid** cell? Explain. **TEKS 6G**

CRITICAL THINKING

- Infer** Does mitosis or **meiosis** occur more frequently in your body? Explain your answer. **TEKS 6G**
- Analyze** Do you think that the Y chromosome contains genes that are critical for an organism’s survival? Explain your reasoning.



SELF-CHECK Online
HMDSscience.com

GO ONLINE



CONNECT TO

TELOMERES

- The ends of DNA molecules form telomeres that help keep the ends of chromosomes from sticking to each other. Why might this be especially important in germ cells, which go through meiosis and make haploid **gametes**? **TEKS 6G**

Interpreting Bar Graphs

TEKS 2G

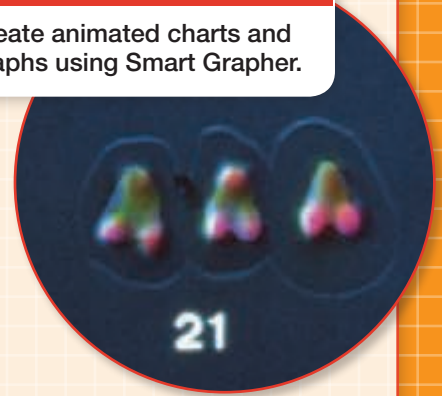
Smart Grapher
HMDSscience.com
GO ONLINE
Create animated charts and graphs using Smart Grapher.

Bar graphs show data with bars. In a bar graph, the independent variable is usually graphed on the *x*-axis and the dependent variable is usually graphed on the *y*-axis. Both axes are labeled with the name and unit of the variable.

Model

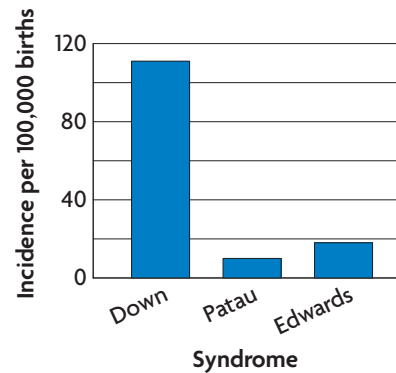
The bar graph below contains data about the frequency of some genetic disorders in the human population. Each of the disorders listed is the result of nondisjunction, the failure of two chromosomes to separate properly during meiosis. This results in one extra chromosome or one less chromosome being passed on to the offspring.

For each syndrome on the *x*-axis, the bar extends vertically on the *y*-axis to represent the incidence per 100,000 births. For example, out of 100,000 births, 111 children are born with Down syndrome.



In most cases, Down syndrome results from an extra chromosome 21. (colored LM; magnification 2000×)

GRAPH 1. FREQUENCY OF GENETIC DISORDERS



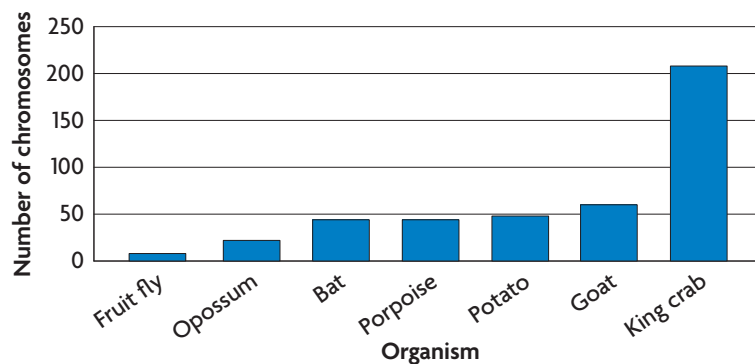
Source: U.S. National Library of Medicine

Practice Interpret a Bar Graph

The bar graph below contains data about the diploid number of chromosomes in different organisms.

- Analyze** Which organism has the greatest number of chromosomes? the least?
- Evaluate** Does chromosome number appear to correlate to the type of organism? Explain.
- Hypothesize** Do you think there is an upper limit to chromosome number? Explain.

GRAPH 2. DIPLOID NUMBER OF CHROMOSOMES IN VARIOUS ORGANISMS



Source: Rutgers University



6.2

Process of Meiosis

TEKS 6G

VOCABULARY

- gametogenesis
- sperm
- egg
- polar body

TEKS 6G recognize the significance of meiosis to sexual reproduction

KEY CONCEPT During meiosis, diploid cells undergo two cell divisions that result in haploid cells.

MAIN IDEAS

- ▶ Cells go through two rounds of division in meiosis.
- ▶ Haploid cells develop into mature gametes.

Connect to Your World

Sometimes division, such as splitting the bill at a restaurant or dividing people into teams for basketball, is difficult. Luckily, understanding how meiosis divides chromosomes between cells is not that hard. Meiosis begins with a diploid cell that has already undergone DNA replication. The cell copies the chromosomes once and divides them twice, making four haploid cells.

▶ MAIN IDEA **TEKS 6G**

Cells go through two rounds of division in meiosis.

Meiosis is a form of nuclear division that creates four haploid cells from one diploid cell. This process involves two rounds of cell division—meiosis I and meiosis II. Each round of cell division has four phases, which are similar to those in mitosis. To keep the two processes distinct in your mind, focus on the big picture. Pay attention to the way meiosis reduces chromosome number and creates genetic diversity.

CONNECT TO

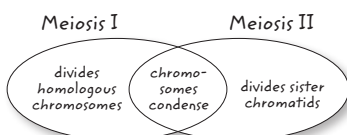
MITOSIS

As you learned in the chapter **Cell Growth and Division**, a condensed, duplicated chromosome is made of two chromatids. Sister chromatids separate during anaphase in mitosis.

READING TOOLBOX

TAKING NOTES

Draw a Venn diagram like the one below to summarize the similarities and differences between meiosis I and meiosis II.



Homologous Chromosomes and Sister Chromatids

To understand meiosis, you need to distinguish between homologous chromosomes and sister chromatids. As **FIGURE 2.1** shows, homologous chromosomes are two separate chromosomes: one from your mother, one from your father.

Homologous chromosomes are very similar to each other, since they have the same length and carry the same genes. But they are not copies of each other. In contrast, each half of a duplicated chromosome is called a chromatid. Together, the two chromatids are called sister chromatids. Thus, the term *sister chromatids* refers to the duplicated chromosomes that remain attached (by the centromere). Homologous chromosomes are divided in meiosis I. Sister chromatids are not divided until meiosis II.

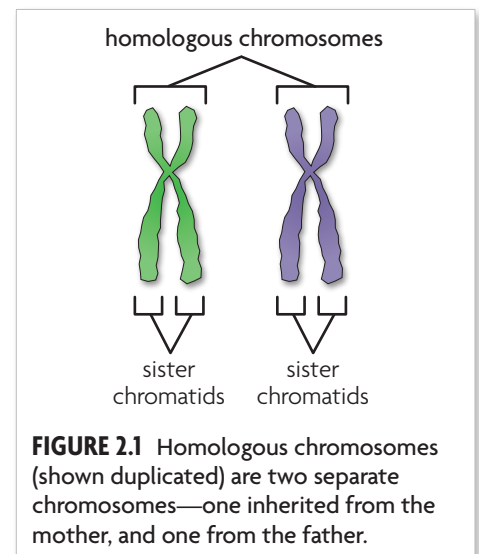


FIGURE 2.1 Homologous chromosomes (shown duplicated) are two separate chromosomes—one inherited from the mother, and one from the father.

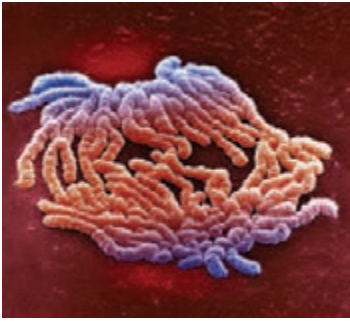


FIGURE 2.2 Homologous chromosomes separate during anaphase I. (colored SEM; magnification 2200 \times)

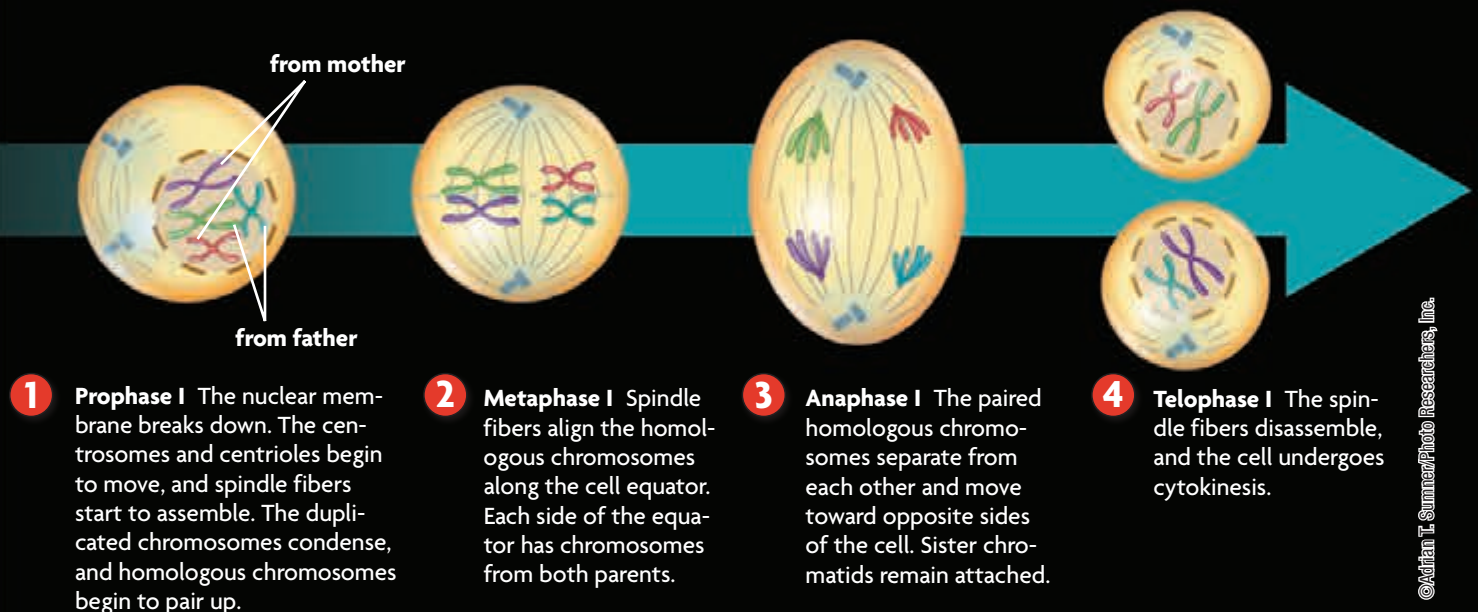
Meiosis I

Before meiosis begins, DNA has already been copied. Meiosis I divides homologous chromosomes, producing two haploid cells with duplicated chromosomes. Like mitosis, scientists describe meiosis in terms of phases, illustrated in **FIGURE 2.3** below. The figure is simplified, showing only four chromosomes.

- 1 Prophase I** Early in meiosis, the nuclear membrane breaks down, the centrosomes and centrioles move to opposite sides of the cell, and spindle fibers start to assemble. The duplicated chromosomes condense, and homologous chromosomes pair up. They appear to pair up precisely, gene for gene, down their entire length. The sex chromosomes also pair with each other, and some regions of their DNA appear to line up as well.
- 2 Metaphase I** The homologous chromosome pairs are randomly lined up along the middle of the cell by spindle fibers. The result is that 23 chromosomes—some from the father, some from the mother—are lined up along each side of the cell equator. This arrangement mixes up the chromosomal combinations and helps create and maintain genetic diversity. Since human cells have 23 pairs of chromosomes, meiosis may result in 2^{23} , or 8,388,608, possible combinations of chromosomes.
- 3 Anaphase I** Next, the paired homologous chromosomes separate from each other and move toward opposite sides of the cell. The sister chromatids remain together during this step and throughout meiosis I.
- 4 Telophase I** The nuclear membrane forms again in some species, the spindle fibers disassemble, and the cell undergoes cytokinesis. The end result is two cells that each have a unique combination of 23 duplicated chromosomes coming from both parents.

FIGURE 2.3 Meiosis

Meiosis I divides homologous chromosomes.



Meiosis II

Meiosis II divides sister chromatids and results in undoubled chromosomes. The following description of this process applies to both of the cells produced in meiosis I. Note that DNA is not copied again between these two stages.

- 5 Prophase II** The nuclear membrane breaks down, centrosomes and centrioles move to opposite sides of the cell, and spindle fibers assemble.
- 6 Metaphase II** Spindle fibers align the 23 chromosomes at the cell equator. Each chromosome still has two sister chromatids at this stage.
- 7 Anaphase II** Next, the sister chromatids are pulled apart from each other and move to opposite sides of the cell.
- 8 Telophase II** Finally, nuclear membranes form around each set of chromosomes at opposite ends of the cell, the spindle fibers break apart, and the cell undergoes cytokinesis. The end result is four haploid cells with a combination of chromosomes from both the mother and father.

Now that you've seen how meiosis works, let's review some key differences between the processes of meiosis and mitosis.

- Meiosis has two cell divisions. Mitosis has only one cell division.
- During meiosis, homologous chromosomes pair up along the cell equator. During mitosis, homologous chromosomes never pair up.
- In anaphase I of meiosis, sister chromatids remain together. In anaphase of mitosis, sister chromatids separate.
- Meiosis results in haploid cells. Mitosis results in diploid cells.

Contrast What is the major difference between metaphase I and metaphase II?

Virtual INVESTIGATION
HMDScience.com
GO ONLINE
Phases of Meiosis

CONNECT TO
CYTOKINESIS
As you learned in the chapter **Cell Growth and Division**, cytokinesis is the division of the cell cytoplasm. This process is the same in cells undergoing either mitosis or meiosis.

Animated
Biology
HMDScience.com
GO ONLINE
Meiosis

Meiosis II divides sister chromatids. The overall process produces haploid cells.



- 5 Prophase II** The centrosomes and centrioles move to opposite sides of the cell, and spindle fibers start to assemble.

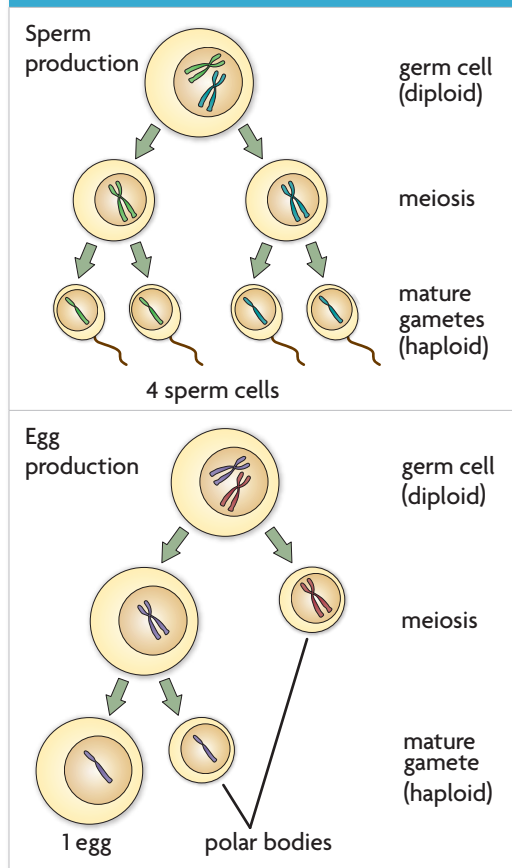
- 6 Metaphase II** Spindle fibers align the chromosomes along the cell equator.

- 7 Anaphase II** The sister chromatids are pulled apart from each other and move to opposite sides of the cell.

- 8 Telophase II** The nuclear membranes form again around the chromosomes, the spindle fibers break apart, and the cell undergoes cytokinesis.

Haploid cells develop into mature gametes.

FIGURE 2.4 GAMETOGENESIS



Haploid cells are the end result of meiosis. Yet these cells are incapable of fertilization until they go through more changes to form mature gametes. **Gametogenesis** (guh-MEE-tuh-JEHN-ih-sihs) is the production of gametes. As **FIGURE 2.4** shows, gametogenesis includes both meiosis and other changes that produce a mature cell. The final stages of gametogenesis differ between the sexes.

The **sperm** cell, the male gamete, is much smaller than the **egg**, the female gamete. The sperm cell's main contribution to an embryo is DNA. Yet it must swim to an egg to fertilize it, so the ability to move is critical. Sperm formation starts with a round cell and ends by making a streamlined cell that can move rapidly. During this process, significant changes occur. DNA is tightly packed and much of the cytoplasm is lost, resulting in a compact head. The sperm cell develops a whiplike flagellum and connecting neck region packed with mitochondria that drive the cell. Other changes, such as the addition of new proteins to the cell membrane, also take place.

The formation of an egg is a complicated process. It begins before birth, inside the developing body of a female embryo, and is not finished until that egg is fertilized by a sperm many years later. The process includes periods of active development and long periods of inactivity.

An egg not only gives its share of DNA to an embryo, but also contributes the organelles, molecular building blocks, and other materials an embryo needs to begin life. Only one of the four cells produced by each round of meiosis actually makes an egg. One

cell—the egg—receives most of the organelles, cytoplasm, and nutrients. Many molecules are not evenly distributed throughout the egg's cytoplasm. This unequal distribution of molecules helps cells in the developing embryo to specialize. The other cells produced by meiosis become **polar bodies**, cells with little more than DNA that are eventually broken down. In many species, including humans, the polar body produced by meiosis I does not undergo meiosis II.

Apply Briefly explain how a sperm cell's structure is related to its function.

6.2 Formative Assessment

REVIEWING ▶ MAIN IDEAS

- How do homologous chromosomes differ from sister chromatids?
- Explain why an **egg** is so much larger than a **sperm** cell.

CRITICAL THINKING

- Predict** If, during metaphase I, all 23 maternal chromosomes lined up on one side of the cell, would genetic diversity increase? Explain. **TEKS 6G**
- Contrast** List the key differences between meiosis I and meiosis II.



SELF-CHECK Online
HMDSscience.com

GO ONLINE

CONNECT TO

CELL BIOLOGY

- Both mitosis and meiosis are types of nuclear division, but they result in different cell types. Describe how the steps of meiosis I differ from those of mitosis.



6.3

Mendel and Heredity

TEKS

3F, 6F

VOCABULARY

trait
genetics
purebred
cross
law of segregation

TEKS 3F research and describe the history of biology and contributions of scientists and **6F** predict possible outcomes of various genetic combinations such as monohybrid crosses, dihybrid crosses and non-Mendelian inheritance

KEY CONCEPT Mendel's research showed that traits are inherited as discrete units.

MAIN IDEAS

- ▶ Mendel laid the groundwork for genetics.
- ▶ Mendel's data revealed patterns of inheritance.

Connect to Your World

When a magician makes a coin disappear, you know that the coin has not really vanished. You simply cannot see where it is. Maybe it is up a sleeve or in a pocket. When organisms reproduce, some traits seem to disappear, too. For centuries, no one could explain why. Then a careful, observant scientist showed that behind this phenomenon were inherited units, or genes.

▶ MAIN IDEA **TEKS 3F, 6F**

Mendel laid the groundwork for genetics.

When we think of how offspring resemble or differ from their parents, we typically refer to specific traits. **Traits** are distinguishing characteristics that are inherited, such as eye color, leaf shape, and tail length. Scientists recognized that traits are hereditary, or passed from one generation to the next, long before they understood how traits are passed on. **Genetics** is the study of biological inheritance patterns and variation in organisms.

The groundwork for much of our understanding of genetics was established in the middle of the 1800s by an Austrian monk named Gregor Mendel, shown in **FIGURE 3.1**. Scientists of the time commonly thought that parents' traits were blended in offspring, like mixing red and white paint to get pink paint. But this idea failed to explain how certain traits remained without being "diluted." Mendel, a shrewd mathematician, bred thousands of plants, carefully counting and recording his results. From his data, Mendel correctly predicted the results of meiosis long before chromosomes were discovered. He recognized that traits are inherited as discrete units from the parental generation, like different colored marbles mixed together that can still be picked out separately. By recognizing that organisms inherit two copies of each discrete unit, what we now call genes, Mendel described how traits were passed between generations.

Connect Give two examples of traits not listed above.

▶ MAIN IDEA **TEKS 3F, 6F**

Mendel's data revealed patterns of inheritance.

Mendel studied plant variation in a monastery garden. He made three key choices about his experiments that played an important role in the development of his laws of inheritance: control over breeding, use of purebred plants, and observation of "either-or" traits that appeared in only two alternate forms.



Gregor Mendel

FIGURE 3.1 Gregor Mendel is called "the father of genetics" for discovering hereditary units. The significance of his work went unrecognized for almost 40 years.

©Bettmann/Corbis

FIGURE 3.2 MENDEL'S PROCESS



Mendel controlled the fertilization of his pea plants by removing the male parts, or stamens.



He then fertilized the female part, or pistil, with pollen from a different pea plant.

Experimental Design

Mendel chose pea plants for his experiments because they reproduce quickly, and he could easily control how they mate. The sex organs of a plant are in its flowers, and pea flowers contain both male and female reproductive organs. In nature, the pea flower typically self-pollinates; that is, the plant mates with itself. If a line of plants has self-pollinated for long enough, that line becomes genetically uniform, or **purebred**. As a result, the offspring of purebred parents inherit all of the parent organisms' characteristics. Mendel was able to mate plants with specific traits by interrupting the self-pollination process. As you can see in **FIGURE 3.2**, he removed the male parts of flowers and fertilized the female parts with pollen that contained sperm cells from a different plant. Because he started with purebred plants, Mendel knew that any variations in offspring resulted from his experiments.

Mendel chose seven traits to follow: pea shape, pea color, pod shape, pod color, plant height, flower color, and flower position. All of these traits are simple "either-or" characteristics; they do not show intermediate features. The plant is tall or short. Its peas are wrinkled or round. What Mendel did not know was that most of the traits he had selected were controlled by genes on separate chromosomes. The selection of these particular traits played a crucial role in enabling Mendel to identify the patterns he observed.

Results

In genetics, the mating of two organisms is called a **cross**. An example of one of Mendel's crosses is highlighted in **FIGURE 3.3**. In this example, he crossed a purebred white-flowered pea plant with a purebred purple-flowered pea plant. These plants are the parental, or P, generation. The resulting offspring, called the first filial—or F_1 —generation, all had purple flowers. The trait for white flowers seemed to disappear. When Mendel allowed the F_1 generation to self-fertilize, the resulting F_2 generation produced both plants with purple flowers and plants with white flowers. Therefore, the trait for white flowers had not disappeared; it had been hidden, or masked.

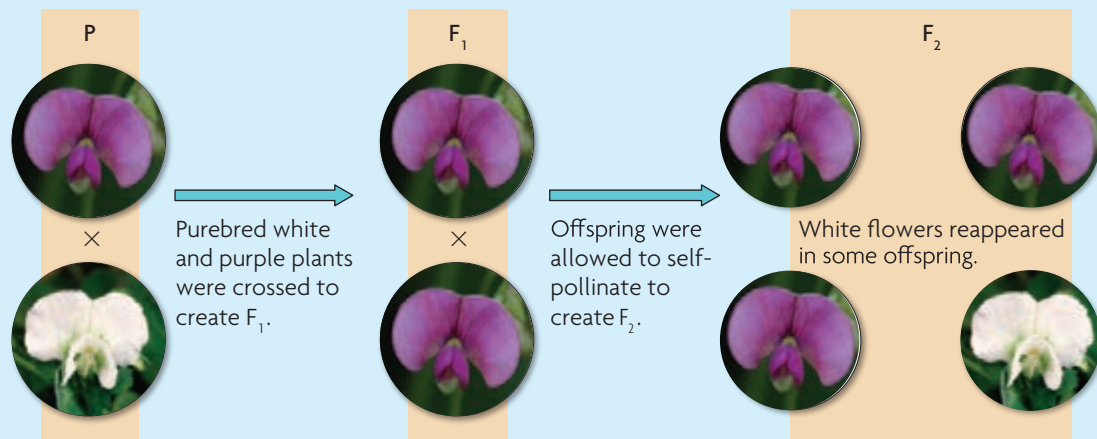
READING TOOLBOX

VOCABULARY

In Latin, the word *filius* means "son" and the word *filia* means "daughter."

FIGURE 3.3 Mendel's Experimental Cross

Traits that were hidden when parental purebred flowers were crossed reappeared when the F_1 generation was allowed to self-pollinate.



Mendel did not cross only two plants, however; he crossed many plants. As a result, he was able to observe patterns. He noticed that each cross yielded similar ratios in the F_2 generation: about three-fourths of the plants had purple flowers, and about one-fourth had white flowers. A ratio is a comparison that tells how two or more things relate. This ratio can be expressed as 3:1 (read “three to one”) of purple:white flowers. As you can see in **FIGURE 3.4**, Mendel’s data show this approximately 3:1 ratio for each of his crosses.

FIGURE 3.4 MENDEL’S MONOHYBRID CROSS RESULTS

F_2 TRAITS	DOMINANT	RECESSIVE	RATIO
Pea shape	5474 round	1850 wrinkled	2.96:1
Pea color	6022 yellow	2001 green	3.01:1
Flower color	705 purple	224 white	3.15:1
Pod shape	882 smooth	299 constricted	2.95:1
Pod color	428 green	152 yellow	2.82:1
Flower position	651 axial	207 terminal	3.14:1
Plant height	787 tall	277 short	2.84:1

Source: Mendel, *Abhandlungen* (1865).

Conclusions

From these observations, Mendel drew three important conclusions. He demonstrated that traits are inherited as discrete units, which provided an explanation for individual traits that persisted without being blended or diluted over successive generations. Mendel’s two other key conclusions are collectively called the **law of segregation**, or Mendel’s first law.

- Organisms inherit two copies of each gene, one from each parent.
- Organisms donate only one copy of each gene in their gametes. Thus, the two copies of each gene segregate, or separate, during gamete formation.

Section 5 covers Mendel’s second law, the law of independent assortment.

Infer Explain why Mendel’s choice of either-or characteristics aided his research.



CONNECT TO

MEIOSIS

As you learned in **Section 2**, homologous chromosomes pair up in prophase I and are separated in anaphase I of meiosis. The overall process produces haploid cells that have a random assortment of chromosomes.

6.3 Formative Assessment

REVIEWING MAIN IDEAS

1. Mendel had no understanding of DNA as the genetic material, yet he was able to correctly predict how **traits** were passed between generations. What does Mendel’s work in **genetics** show about the value of scientific observation? **TEKS 3F**
2. Why is it important that Mendel began with **purebred** plants?

CRITICAL THINKING

3. **Analyze** Mendel saw purple flowers in the F_1 generation, but both purple and white flowers in F_2 . How did this help him see that traits are inherited as discrete units? **TEKS 6F**
4. **Evaluate** If Mendel had examined only one trait, do you think he would have developed the **law of segregation**? Explain.



CONNECT TO

SCIENTIFIC PROCESS

5. You have learned that scientific thinking involves observing, forming hypotheses, testing hypotheses, and analyzing data. Use examples from Mendel’s scientific process to show how his work fit this pattern. **TEKS 3A, 3F**



6.4

Traits, Genes, and Alleles

TEKS 6A, 6F

KEY CONCEPT Genes encode proteins that produce a diverse range of traits.

VOCABULARY

- gene
- allele
- homozygous
- heterozygous
- genome
- genotype
- phenotype
- dominant
- recessive

MAIN IDEAS

- ▶ The same gene can have many versions.
- ▶ Genes influence the development of traits.

Connect to Your World

Most things come in many forms. Bread can be wheat, white, or rye. Cars can be two-door, four-door, hatchback, or convertible. Potatoes have more varieties than can be counted on two hands. Genes, too, come in many forms.

TEKS 6A identify components of DNA, and describe how information for specifying the traits of an organism is carried in the DNA and **6F** predict possible outcomes of various genetic combinations such as monohybrid crosses, dihybrid crosses and non-Mendelian inheritance

▶ MAIN IDEA **TEKS 6A, 6F**

The same gene can have many versions.

As you have learned, Mendel’s discrete units of heredity are now called genes. But what are genes? You can think of a **gene** as a piece of DNA that provides a set of instructions to a cell to make a certain protein. This definition is not precise, but it gives you the main idea. Each gene has a locus, a specific position on a pair of homologous chromosomes. Just as a house is a physical structure and an address tells where that house is located, you can think of the locus as the “address” that tells where a gene is located on a chromosome.

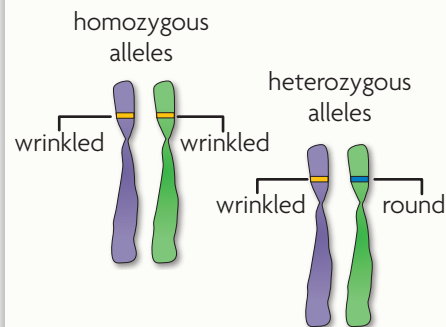
Most genes exist in many forms. In Mendel’s experiments, the effects of these different forms were easy to see: yellow or green, round or wrinkled. An **allele** (uh-LEEL) is any of the alternative forms of a gene that may occur at a specific locus. Your cells have two alleles for each gene, one on each of the homologous chromosomes on which the locus for that gene is found. Each parent gives one allele. The two alleles may be the same, or they may be different. The term **homozygous** (HOH-moh-ZY-guhs) describes two of the same alleles at a specific locus. For example, both might code for white flowers. The term **heterozygous** (HEHT-uh-uh-ZY-guhs) describes two different alleles at a specific locus. Thus, one might code for white flowers, the other for purple flowers.

Compare and Contrast Distinguish between the terms *allele* and *locus*.

TEKS 6A

VISUAL VOCAB

Homozygous alleles are identical to each other.



Heterozygous alleles are different from each other.

Genes influence the development of traits.

You may have heard about the Human Genome Project. Its goal was to find out the sequence of the 3 billion nucleotide pairs that make up a human's genome. A **genome** is all of an organism's genetic material. Unless you have an identical twin, you have a unique genome that determines all of your traits. Some of your traits, such as the color of your eyes, can be seen. Other traits, such as the exact chemical makeup of your eyeball, cannot be seen.

In genetics, we often focus on a single trait or set of traits. A genome is all of an organism's genes, but a **genotype** (JEHN-uh-TYP) typically refers to the genetic makeup of a specific set of genes. The genotype of a pea plant includes both of the genes that code for flower color, even if one of these genes is masked. In contrast, the physical characteristics, or traits, of an individual organism make up its **phenotype** (FEE-nuh-TYP). A pea plant with purple flowers has a phenotype for purple flowers. The plant might have a hidden gene for white flowers, but that does not matter to its phenotype.

Dominant and Recessive Alleles

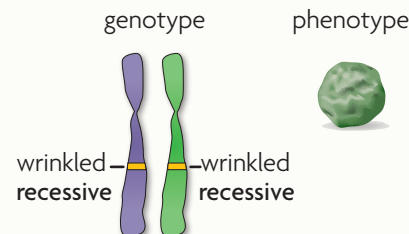
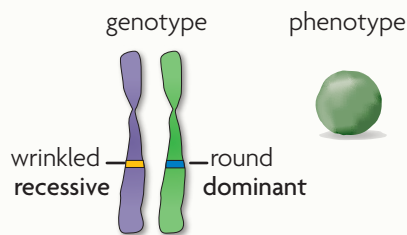
If an organism is heterozygous for a trait, which allele will be expressed? That is, if a plant has one allele for purple flowers and one for white flowers, what color will the flowers be? As Mendel learned, one allele may be dominant over another allele. A **dominant** allele is the allele that is expressed when two different alleles or two dominant alleles are present. A **recessive** allele is the allele that is expressed only when two copies are present. In Mendel's experiments, the allele for purple flowers was dominant to the allele for white flowers. All F₁ plants were purple even though they had only one allele for purple flowers.

Sometimes the word *dominant* is misunderstood. A dominant allele is not necessarily better or stronger than a recessive allele. It does not necessarily occur most often in the population. An allele is dominant in a heterozygote simply because it is expressed and the other allele is not.

Alleles are often represented on paper with individual letters. An organism's genotype for a trait can be shown with two letters—one per allele. Uppercase letters are used for dominant alleles, and lowercase letters are used for recessive alleles. For example, the dominant allele for height in pea plants is written as *T*, for tall. The recessive allele for short plants is written as *t*.

VISUAL VOCAB

A **dominant** allele is expressed when two different alleles are present.



A **recessive** allele is expressed only when two copies are present.



FIGURE 4.1 Polydactyly is the condition of having more than the typical number of fingers or toes. The allele for polydactyly is dominant.

CONNECT TO

EXCEPTIONS TO MENDEL'S LAWS

Mendel's theory of inheritance cannot explain all patterns of inheritance. As you will learn in the chapter **Extending Mendelian Genetics**, incomplete dominance, codominance, polygenic traits, and environmental influences all provide exceptions.

A plant's genotype might be homozygous dominant (TT), heterozygous (Tt), or homozygous recessive (tt).



FIGURE 4.2 Both the homozygous dominant and heterozygous genotypes result in smooth, or inflated, pods (top). Only the homozygous recessive genotype results in constricted pods (inset).

Alleles and Phenotype

Because some alleles are dominant over others, two genotypes can produce the dominant phenotype. For example, smooth pods and constricted pods in pea plants, shown in **FIGURE 4.2**, are phenotypes. A plant with smooth pods could have a homozygous dominant (SS) or heterozygous (Ss) genotype. In contrast, a plant with constricted, or compressed, pods could have only a homozygous recessive (ss) genotype.

What actually makes one allele dominant over another? The answer is very complicated. It depends on the nature of the protein that is, or is not, made. Let's look at a fairly simple example. Pigment gives cells color. If P directs flower cells to make pigment, the flower may look purple. If p directs the cells not to make pigment, the flower looks white. So P codes for pigment to be present, but p codes for nothing, the absence of pigment. As a result, P has to be dominant. Even if the flower has only one P allele (Pp), that one allele tells its cells to make pigment, and the flower has color. Flower pigment is only one example. Many factors make one allele dominant over another.

As you know, most plants are not simply tall or short. Most flowers are not just white or purple. Most traits occur in a range. Other factors also affect traits. A lack of sunshine or vital nutrients could stunt a plant's growth. How does genetics account for these issues? Mendel studied traits that follow simple dominant-recessive patterns of inheritance, and each trait was the result of a single gene. In general, however, inheritance is much more complex. Most alleles are not simply dominant or recessive; some are codominant. Many traits are influenced by multiple genes. The environment also interacts with genes and affects their expression.

Contrast Explain the difference between genotype and phenotype.

6.4 Formative Assessment

REVIEWING MAIN IDEAS

1. How are the terms **gene**, locus, and **allele** related? **TEKS 6A**
2. Explain why an organism's genotype may be **homozygous** dominant, homozygous recessive, or **heterozygous**, but never heterozygous recessive. **TEKS 6F**

CRITICAL THINKING

3. **Apply** Suppose you are studying a fruit fly's DNA, and you discover a gene for antenna length on chromosome 2. What word describes its location, and where would it be found in other fruit flies' DNA?
4. **Predict** If a **recessive** allele helps an organism reproduce, but the **dominant** allele hinders reproduction, which will be more common in a population? **TEKS 6F**



SELF-CHECK Online
HMDSscience.com

GO ONLINE

CONNECT TO

HUMAN BIOLOGY

5. Cystic fibrosis is a recessive disease that causes the production of abnormally thick, life-threatening mucus secretions. What is the **genotype** of a person with cystic fibrosis: CC , Cc , or cc ? Explain.



6.5

Traits and Probability

TEKS 3F, 6F, 6G

KEY CONCEPT The inheritance of traits follows the rules of probability.

VOCABULARY

Punnett square
monohybrid cross
testcross
dihybrid cross
law of independent assortment
probability

MAIN IDEAS

- ▶ Punnett squares illustrate genetic crosses.
- ▶ A monohybrid cross involves one trait.
- ▶ A dihybrid cross involves two traits.
- ▶ Heredity patterns can be calculated with probability.

TEKS 3F research and describe the history of biology and contributions of scientists; **6F** predict possible outcomes of various genetic combinations such as monohybrid crosses, dihybrid crosses and non-Mendelian inheritance; **6G** recognize the significance of meiosis to sexual reproduction

Connect to Your World

If you have tried juggling, you know it can be a tricky thing. Keeping three flaming torches or clubs in motion at the same time is a challenge. Trying to keep track of what organism has which genotype and which gamete gets which allele can also be a lot to juggle. Fortunately, R. C. Punnett developed a method to keep track of all of the various combinations graphically.

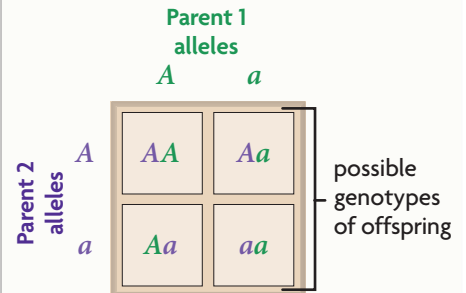
MAIN IDEA **TEKS 3F, 6F, 6G**

Punnett squares illustrate genetic crosses.

Shortly after Mendel's experiments became widely known among scientists, a poultry geneticist named R. C. Punnett, shown in **FIGURE 5.1**, developed the Punnett square. A **Punnett square** is a grid system for predicting all possible genotypes resulting from a cross. The axes of the grid represent the possible gamete genotypes of each parent. The grid boxes show all of the possible genotypes of offspring from those two parents. Because segregation and fertilization are random events, each combination of alleles is as likely to be produced as any other. By counting the number of squares with each genetic combination, we can find the ratio of genotypes in that generation. If we also know how the genotype corresponds to the phenotype, we can find the ratio of phenotypes in that generation as well.

VISUAL VOCAB

The **Punnett square** is a grid system for predicting possible genotypes of offspring.



Let's briefly review what you've learned about meiosis and segregation to examine why the Punnett square is effective. Both parents have two alleles for each gene. These alleles are represented on the axes of the Punnett square. During meiosis, the chromosomes—and, therefore, the alleles—are separated.



R. C. Punnett

FIGURE 5.1 R. C. Punnett developed the Punnett square as a way to illustrate genetic crosses.

Each gamete gets one of the alleles. Since each parent contributes only one allele to the offspring, only one allele from each parent is written inside each grid box. Fertilization restores the diploid number in the resulting offspring. This is why each grid box has two alleles, one from the mother and one from the father. Since any egg has the same chance of being fertilized by any sperm cell, each possible genetic combination is equally likely to occur.

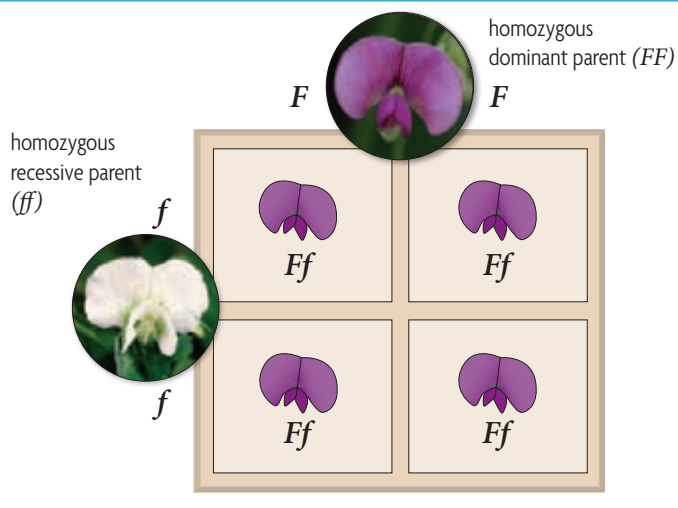
Explain What do the letters on the axes of the Punnett square represent?

MAIN IDEA **TEKS** 6F

A monohybrid cross involves one trait.

Thus far, we have studied **monohybrid crosses**, crosses that examine the inheritance of only one specific trait. Three example crosses are used below and on the next page to illustrate how Punnett squares work and to highlight the resulting ratios—for both genotype and phenotype.

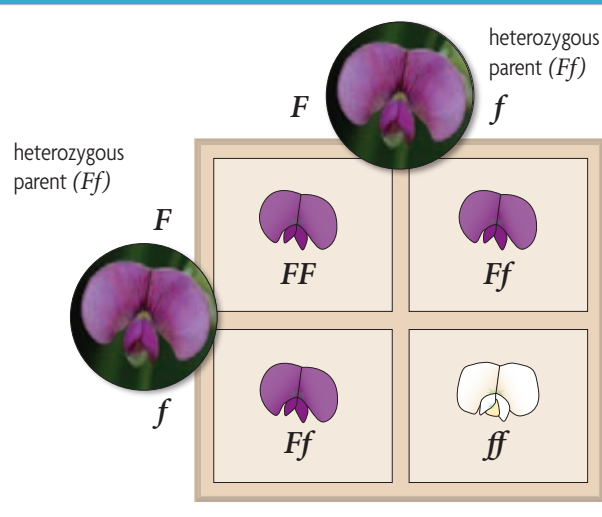
FIGURE 5.2 HOMOZYGOUS-HOMOZYGOUS



Homozygous-Homozygous

Suppose you cross a pea plant that is homozygous dominant for purple flowers with a pea plant that is homozygous recessive for white flowers. To determine the genotypic and phenotypic ratios of the offspring, first write each parent's genotype on one axis: FF for the purple-flowered plant, ff for the white-flowered plant. Every gamete from the purple-flowered plant contains the dominant allele, F . Every gamete from the white-flowered plant contains the recessive allele, f . Therefore, 100% of the offspring have the heterozygous genotype, Ff . And 100% of the offspring have purple flowers because they all have a copy of the dominant allele, as shown in **FIGURE 5.2**.

FIGURE 5.3 HETEROZYGOUS-HETEROZYGOUS



Heterozygous-Heterozygous

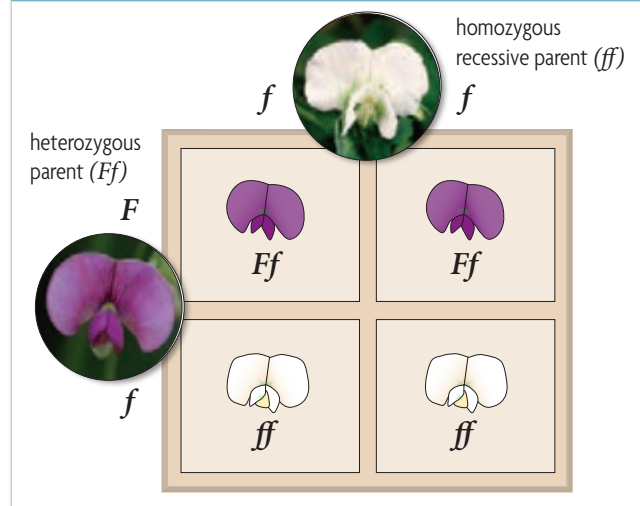
Next, in **FIGURE 5.3**, you can see a cross between two purple-flowered pea plants that are both heterozygous (Ff). From each parent, half the offspring receive a dominant allele, F , and half receive a recessive allele, f . Therefore, one-fourth of the offspring have a homozygous dominant genotype, FF ; half have a heterozygous genotype, Ff ; and one-fourth have a homozygous recessive genotype, ff . Both the FF and the Ff genotypes result in purple flowers. Only the ff genotype results in white flowers. Thus, the genotypic ratio is 1:2:1 of homozygous dominant:heterozygous:homozygous recessive. The phenotypic ratio is 3:1 of purple:white flowers.

Heterozygous-Homozygous

Finally, suppose you cross a pea plant that is heterozygous for purple flowers (Ff) with a pea plant that is homozygous recessive for white flowers (ff). As before, each parent's genotype is placed on an axis, as shown in **FIGURE 5.4**. From the homozygous parent with white flowers, the offspring each receive a recessive allele, f . From the heterozygous parent, half the offspring receive a dominant allele, F , and half receive a recessive allele, f . Half the offspring have a heterozygous genotype, Ff . Half have a homozygous recessive genotype, ff . Thus, half the offspring have purple flowers, and half have white flowers. The resulting genotypic ratio is 1:1 of heterozygous:homozygous recessive. The phenotypic ratio is 1:1 of purple:white.

Suppose we did not know the genotype of the purple flower in the cross above. This cross would allow us to determine that the purple flower is heterozygous, not homozygous dominant. A **testcross** is a cross between an organism with an unknown genotype and an organism with the recessive phenotype. The organism with the recessive phenotype must be homozygous recessive. The offspring will show whether the organism with the unknown genotype is heterozygous, as above, or homozygous dominant.

FIGURE 5.4 HETEROZYGOUS-HOMOZYGOUS



Apply From an $FF \times Ff$ cross, what percent of offspring would have purple flowers?

TEKS 6F

QUICKLAB

INFERRING **TEKS 6F**

Using a Testcross

Suppose you work for a company that sells plant seeds. You are studying a plant species in which the dominant phenotype is pink flowers (PP or Pp). The recessive phenotype is white flowers (pp). Customers have been requesting more plants with pink flowers. To meet this demand, you need to determine the genotypes of some of the plants you are currently working with.

PROBLEM What is the genotype of each plant?

PROCEDURE

1. Suppose you are presented with Plant A of the species you are studying. It has pink flowers. You want to determine the genotype of the plant.
2. You cross Plant A with Plant B of the same species. This plant has white flowers and a known genotype of pp .
3. The resulting cross yields six plants with pink flowers and six plants with white flowers. Use Punnett squares to determine the genotype of Plant A.

ANALYZE AND CONCLUDE

1. **Apply** What is the genotype of Plant A? Explain how you arrived at your answer.
2. **Apply** What are the possible genotypes and phenotypes of offspring if Plant A is crossed with a plant that has a genotype of PP ?
3. **Calculate** What ratio of dominant to recessive phenotypes would exist if Plant A were crossed with a plant that has a genotype of Pp ?
4. **Evaluate** Is Plant A the best plant, in terms of genotype, that you can work with to produce as many of the requested seeds as possible? Why or why not? Which genotype would be best to work with?

MATERIALS

- pencil
- paper

A dihybrid cross involves two traits.

CONNECT TO

LAW OF SEGREGATION

As you learned in **Section 3**, Mendel's first law of inheritance is the law of segregation. It states that organisms inherit two copies of each gene but donate only one copy to each gamete.

Biology **VIDEO CLIP**
 HMDSscience.com
 GO ONLINE
 Law of Independent Assortment

All of the crosses discussed so far have involved only a single trait. However, Mendel also conducted **dihybrid crosses**, crosses that examine the inheritance of two different traits. He wondered if both traits would always appear together or if they would be expressed independently of each other.

Mendel performed many dihybrid crosses and tested a variety of different combinations. For example, he would cross a plant with yellow round peas with a plant with green wrinkled peas. Remember that Mendel began his crosses with purebred plants. Thus, the first generation offspring (F_1) would all be heterozygous and would all look the same. In this example, the plants would all have yellow round peas. When Mendel allowed the F_1 plants to self-pollinate, he obtained the following results: 9 yellow/round, 3 yellow/wrinkled, 3 green/round, 1 green/wrinkled.

Mendel continued to find this approximately 9:3:3:1 phenotypic ratio in the F_2 generation, regardless of the combination of traits. From these results, he realized that the presence of one trait did not affect the presence of another trait. His second law of genetics, the **law of independent assortment**, states that allele pairs separate independently of each other during gamete formation, or meiosis. That is, different traits appear to be inherited separately.

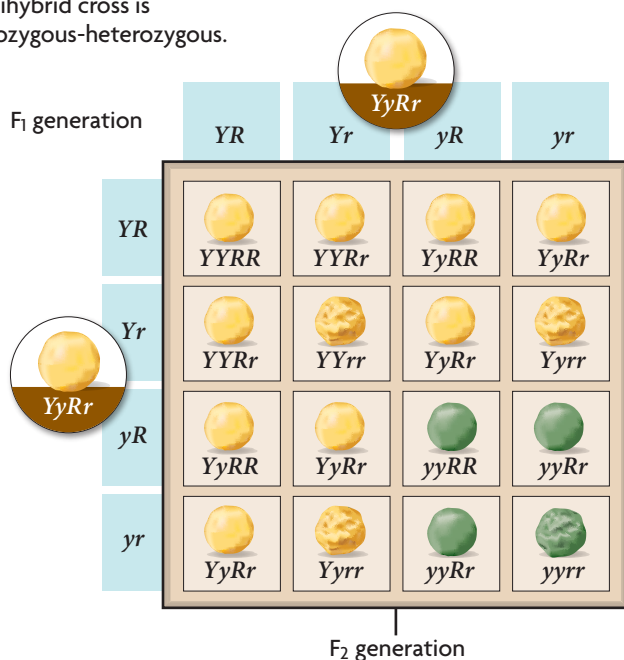
The results of Mendel's dihybrid crosses can also be illustrated with a Punnett square, like the one in **FIGURE 5.5**. Drawing a Punnett square for a dihybrid cross is the same as drawing one for a monohybrid cross, except that the grid is bigger because two genes, or four alleles, are involved. For example, suppose you cross two plants with yellow, round peas that are heterozygous for both traits ($YyRr$). The four allele combinations possible in each gamete—

YR , Yr , yR , and yr —are used to label each axis. Each grid box can be filled in using the same method as that used in the monohybrid cross. A total of nine different genotypes may result from the cross in this example. However, these nine genotypes produce only four different phenotypes. These phenotypes are yellow round, yellow wrinkled, green round, and green wrinkled, and they occur in the ratio of 9:3:3:1. Note that the 9:3:3:1 phenotypic ratio results from a cross between organisms that are heterozygous for both traits. The phenotypic ratio of the offspring will differ (from 9:3:3:1) if one or both of the parent organisms are homozygous for one or both traits.

Analyze In **FIGURE 5.5**, the boxes on the axes represent the possible gametes made by each parent plant. Why does each box have two alleles?

FIGURE 5.5 DIHYBRID CROSS

This dihybrid cross is heterozygous-heterozygous.



MAIN IDEA **TEKS** 6F

Heredity patterns can be calculated with probability.

Probability is the likelihood that a particular event will happen. It predicts the average number of occurrences, not the exact number of occurrences.

$$\text{Probability} = \frac{\text{number of ways a specific event can occur}}{\text{number of total possible outcomes}}$$

Suppose you flip a coin. The number of total possible outcomes is two: heads up or tails up. The probability that it would land heads up is $1/2$, or one out of two. The probability that it would land tails up is also $1/2$.

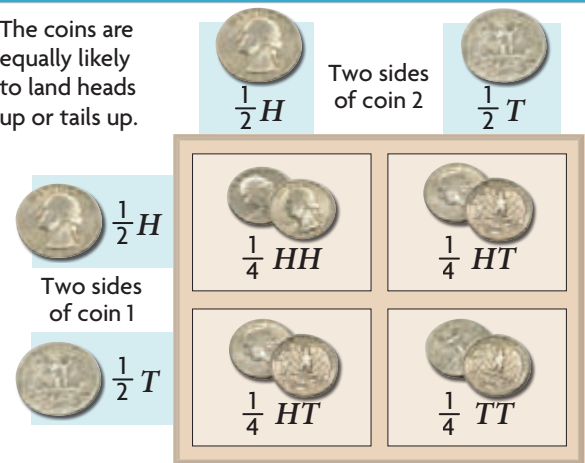
Next, suppose you flip two coins. How one coin lands does not affect how the other coin lands. To calculate the probability that two independent events will happen together, multiply the probability of each individual event. The probability that both coins will land heads up, for example, is $1/2 \times 1/2 = 1/4$.

These probabilities can be applied to meiosis. Suppose a germ cell undergoes meiosis in a plant that is heterozygous for purple flowers. The number of total possible outcomes is two because a gamete could get a dominant or a recessive allele. The probability that a gamete will get a dominant allele is $1/2$. The probability that it will get a recessive allele is also $1/2$.

If two plants that are heterozygous for purple flowers fertilize each other, the probability that both egg and sperm have a dominant allele is $1/2 \times 1/2 = 1/4$. So, too, the probability that both have a recessive allele is $1/4$. There is also a $1/4$ chance that a sperm cell with a dominant allele will fertilize an egg with a recessive allele, or that a sperm cell with a recessive allele will fertilize an egg with a dominant allele. These last two combinations are basically the same. In either case, the resulting plant will be heterozygous. Thus, the probability that a pea plant will be heterozygous for this trait is the sum of the probabilities: $1/4 + 1/4 = 1/2$.

FIGURE 5.6 PROBABILITY AND HEREDITY

The coins are equally likely to land heads up or tails up.



Apply Explain how Mendel's laws relate to probability. **TEKS** 3F

SELF-CHECK Online
HMDSscience.com
GO ONLINE

6.5 Formative Assessment

REVIEWING **MAIN IDEAS**

1. What do the grid boxes in a **Punnett square** represent?
2. Why does the expected genotypic ratio often differ from the expected phenotypic ratio resulting from a **monohybrid cross**?
3. How did Mendel's **dihybrid crosses** help him develop his second law?

TEKS 3F

CRITICAL THINKING

4. **Calculate** What would be the phenotypic ratios of the offspring resulting from the following cross: $YYRr \times YyRr$? **TEKS** 6F
5. **Predict** If you are working with two tall pea plants and know that one is Tt , how could you determine the genotype of the other plant?

TEKS 6F

CONNECT TO

ADAPTATION

6. You have seen that one-quarter of offspring resulting from two heterozygous parents are homozygous recessive. Yet for some genes, the recessive allele is more common in the population. Explain why this might be.

GO Online!



One Step at a Time



VIRTUAL Lab

Breeding Mutations in Fruit Flies Cross purebred fruit flies to determine the pattern of inheritance for a set of mutant alleles.



Animated BIOLOGY

Meiosis
From prophase I to telophase II, watch each phase of meiosis in action.



Web Quest

Selective Breeding Find out how dog breeders enhance certain traits in selective breeding.





6.6

Meiosis and Genetic Variation

TEKS 6F, 6G

KEY CONCEPT Independent assortment and crossing over during meiosis result in genetic diversity.

VOCABULARY

crossing over
genetic linkage

MAIN IDEAS

- ▶ Sexual reproduction creates unique gene combinations.
- ▶ Crossing over during meiosis increases genetic diversity.

TEKS 6F predict possible outcomes of various genetic combinations such as monohybrid crosses, dihybrid crosses and non-Mendelian inheritance and **6G** recognize the significance of meiosis to sexual reproduction

☀ Connect to Your World

A surprising number of people make their living as Elvis impersonators. They wear slicked-up hairdos, large sunglasses, and big white jumpsuits. They mimic his voice, his dancing, and his phrases. They copy every possible detail, but they still do not come close to being the King. Elvis, like all people, was unique, or one of a kind. This uniqueness arises more from the events of meiosis—from the tiny shufflings of chromosomes and the crossing over of DNA segments—than from our hairstyles or our clothing.

▶ **MAIN IDEA** **TEKS 6G**

Sexual reproduction creates unique gene combinations.



The major advantage of sexual reproduction is that it gives rise to a great deal of genetic variation within a species, as shown in **FIGURE 6.1**. This variation results largely from (1) the independent assortment of chromosomes during meiosis and (2) the mixing of alleles as gametes join during fertilization.

Recall that homologous chromosomes pair up randomly along the cell equator during meiosis I. In other words, it's a matter of chance which of the two chromosomes from any homologous pair ends up on a given side of the cell equator. As you've learned, human cells have 23 pairs of chromosomes, and each pair lines up independently. As a result, gametes with 2^{23} , or about 8 million, different combinations of chromosomes can be produced through meiosis from one human cell.

Now think about the fact that sexual reproduction produces offspring through the combination of gametes. In humans, for example, a sperm cell with one of 2^{23} (about 8 million) chromosome combinations fertilizes an egg cell, which also has one out of 2^{23} chromosome combinations. If sperm cells and eggs were combined at random, the total number of possible combinations is the product of $2^{23} \times 2^{23}$, or more than 70 trillion. In other words, a human couple can produce a child with one of about 70 trillion different combinations of chromosomes.

FIGURE 6.1 This photograph shows only a small sample of the great genetic potential for variety in the human population.

©Chuck Savage/Corbis

CONNECT TO

EVOLUTION

As you will learn in the chapter **Principles of Evolution**, natural selection is a mechanism by which individuals that have inherited beneficial adaptations produce more offspring on average than do other individuals. The rabbit-eared bandicoot (below) has adaptations that enable it to survive and reproduce in regions of Australia.



Independent assortment and fertilization play key roles in creating and maintaining genetic diversity in all sexually reproducing organisms. However, the number of possible chromosome combinations varies by species. The probability that a bald eagle or a rabbit-eared bandicoot will inherit a specific allele is determined in the same way that it is for a pea plant.

Sexual reproduction creates unique combinations of genes. This results in organisms with unique phenotypes. The offspring of sexual reproduction have a mixture of both parents' traits. For example, rabbit-eared bandicoot offspring all share many traits for the things that make them bandicoots, but they may also differ in many ways. Some may be colored more like the mother, others more like the father. Some may dig deeper burrows or hunt more skillfully; others may in time produce more milk for their own offspring or have more litters. Having some of these traits may allow one bandicoot to reproduce in conditions where another bandicoot could not.

Calculate Fruit fly gametes each have four chromosomes, representing 2^4 , or 16, possible chromosome combinations. How many chromosome combinations could result from fertilization between a fruit fly egg and a sperm cell?

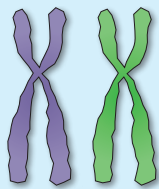
MAIN IDEA **TEKS** 6F, 6G

Crossing over during meiosis increases genetic diversity.

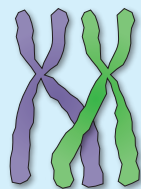
It is clear that independent assortment creates a lot of variation within a species. Another process, called crossing over, occurs during meiosis and helps create even greater variation. **Crossing over** is the exchange of chromosome segments between homologous chromosomes during prophase I of meiosis I. At this stage, each chromosome has been duplicated, the sister chromatids are still connected to each other, and homologous chromosomes have paired with each other. When homologous chromosomes are in this position, some of the chromatids are very close to each other. Part of one chromatid from each chromosome breaks off and reattaches to the other chromosome, as shown in **FIGURE 6.2**. Crossing over happens any time a germ cell divides. In fact, it can occur many times within the same pair of homologous chromosomes.

FIGURE 6.2 Crossing Over

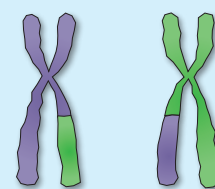
Crossing over exchanges segments of DNA between homologous chromosomes.



1 Two homologous chromosomes pair up with each other during prophase I in meiosis.



2 In this position, some chromatids are very close to each other and segments cross.



3 Some of these segments break off and reattach to the other homologous chromosome.

Synthesize Draw the four chromosomes that would result after the above chromosomes go through meiosis.

Because crossing over results in new combinations of genes, it is also called recombination. The term *recombination* generally refers to any mixing of parental alleles, including recombination events.

Now that you know about crossing over, let's look again at some of Mendel's results and conclusions. As you know from his research, genes located on separate chromosomes assort independently. This independence is caused by the random assortment of chromosomes during meiosis. But you also know that a single chromosome can have hundreds of genes. What happens when two genes are both on the same chromosome? Will they display independent assortment as well? Or will they travel together as a unit?

The answer to these questions is, "It depends." Recall that each gene has its own locus, or place on a chromosome. As **FIGURE 6.3** shows, some genes on the same chromosome are close together; others are far apart. The farther apart two genes are located, the more likely they are to be separated when crossing over happens. Thus, genes located close together tend to be inherited together, which is called **genetic linkage**. Linked genes will be inherited in the same predicted ratios as would a single gene. In contrast, genes that are far apart are more likely to assort independently. For example, the alleles for flower and seed color are located on the same chromosome in pea plants, but they are not near each other. Because they are so far apart, Mendel observed independent assortment for these traits.

Genetic linkage has let scientists calculate the physical distance between two genes. By exploring relationships between many genes, scientists have been able to build a linkage, or genetic, map of many species.

Predict Suppose two genes are very close together on a chromosome. Are the genes likely to be separated by crossing over? Explain. **TEKS 6F**

WebQuest

HMDScience.com

GO ONLINE

Selective Breeding

FIGURE 6.3 GENETIC LINKAGE

A and B are not linked to C and D because they are so far apart. Crossing over is likely to occur in the space between genes B and C, thereby separating A and B from C and D.



A and B are referred to as linked because they would likely be inherited together.

C and D are referred to as linked because they would likely be inherited together.

6.6 Formative Assessment

REVIEWING ► MAIN IDEAS

1. Briefly explain how sexual reproduction generates new allele combinations in offspring. **TEKS 6G**
2. How does **crossing over** contribute to genetic diversity? **TEKS 6F**

CRITICAL THINKING

3. **Infer** You know that you get half your DNA from your mom, half from your dad. Does this mean you got one-quarter of your DNA from each of your grandparents? Explain your reasoning. **TEKS 6G**
4. **Synthesize** Suppose you know that two genes exist on the same chromosome. How could you determine if they are located close to each other?



SELF-CHECK Online

HMDScience.com

GO ONLINE

CONNECT TO

MITOSIS

5. Mitosis creates daughter cells that are genetically identical to the parent cell. If crossing over occurred between sister chromatids during mitosis, would it increase genetic diversity? Explain. **TEKS 6F**

6 Summary

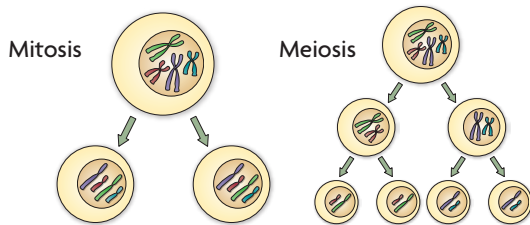
BIG IDEA

In meiosis, genetic material from two parent organisms results in offspring with traits that follow a pattern of inheritance.

KEY CONCEPTS

6.1 Chromosomes and Meiosis

Gametes have half the number of chromosomes that body cells have. Your body cells have 23 pairs of homologous chromosomes, making 46 total chromosomes. Gametes have only 1 chromosome from each homologous pair—23 chromosomes in all.



6.2 Process of Meiosis

During meiosis, diploid cells undergo two cell divisions that result in haploid cells. In meiosis I, homologous chromosomes pair up along the cell equator and are divided into separate cells. In meiosis II, sister chromatids are divided into separate cells, making a total of four haploid cells that are genetically unique.

6.3 Mendel and Heredity

Mendel's research showed that traits are inherited as discrete units. His large amount of data, control over breeding, use of purebred plants, and observation of "either-or" traits allowed him to see patterns in the inheritance of traits. He concluded that organisms inherit two copies of each gene and that organisms donate only one copy of each gene in their gametes.

6.4 Traits, Genes, and Alleles

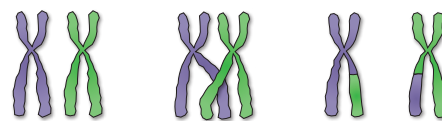
Genes encode proteins that produce a diverse range of traits. Every diploid organism has two alleles for each gene: one from the mother, one from the father. These two alleles may be the same (homozygous) or different (heterozygous). One allele may be dominant over another.

6.5 Traits and Probability

The inheritance of traits follows the rules of probability. Punnett squares are a grid system for predicting all possible genotypes resulting from a cross. When Mendel performed two-trait crosses, he discovered that different traits appear to be inherited separately—the law of independent assortment. The patterns of inheritance that he observed can be predicted by using mathematical probabilities.

6.6 Meiosis and Genetic Variation

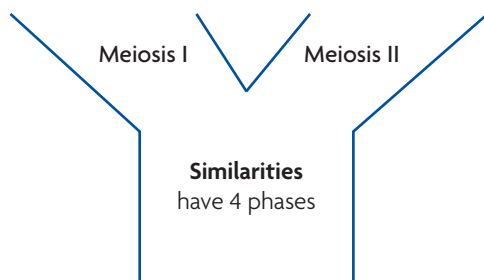
Independent assortment and crossing over during meiosis result in genetic diversity. Independent assortment produces unique combinations of parental chromosomes. Crossing over between homologous chromosomes creates a patchwork of genes from both parents. Genetic linkage describes genes that are close together and tend to be inherited as a unit.



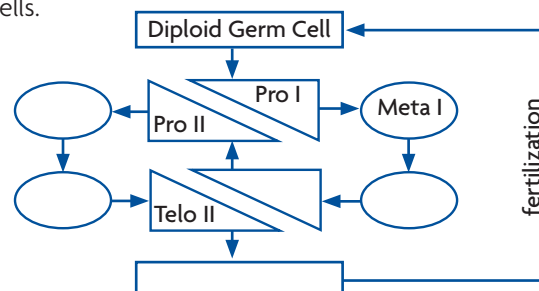
READING TOOLBOX

SYNTHESIZE YOUR NOTES

“Y” Diagram Use a “Y” diagram to summarize what you know about meiosis I and meiosis II.



Cycle Diagram Fill in a cycle diagram like the one below to show the relationship between diploid and haploid cells.



6 Review



CHAPTER VOCABULARY


- | | | |
|---|---|--|
| <p>6.1 somatic cell
gamete
homologous chromosome
autosome
sex chromosome
sexual reproduction
fertilization
diploid
haploid
meiosis</p> <p>6.2 gametogenesis
sperm</p> | <p>6.3 trait
genetics
purebred
cross
law of segregation</p> <p>6.4 gene
allele
homozygous
heterozygous
genome</p> | <p>egg
polar body
genotype
phenotype
dominant
recessive</p> <p>6.5 Punnett square
monohybrid cross
testcross
dihybrid cross
law of independent assortment
probability</p> <p>6.6 crossing over
genetic linkage</p> |
|---|---|--|

Reviewing Vocabulary

Visualize Vocabulary

For each term below, use simple shapes, lines, or arrows to illustrate its meaning. Below each picture, write a short caption. Here's an example for the term *diploid*:

- gene
- fertilization
- crossing over
- genetic linkage
- haploid



Diploid cells have two copies of each chromosome.

Reviewing MAIN IDEAS

- Each of your cells has a set of chromosomes, including autosomes and sex chromosomes. Explain the main differences between these two types of chromosomes.
- A fruit fly has diploid cells with 8 chromosomes. Explain how many chromosomes are in its haploid gametes.
- Meiosis is a continuous process, but we can think of it as taking place in two stages, meiosis I and meiosis II. How do the products of meiosis I differ from those of meiosis II? **TEKS 6G**
- The foundation for our modern study of genetics began with Gregor Mendel, who studied pea plants. What were Mendel's two main conclusions about how traits are passed between generations? **TEKS 3F**
- How did Mendel's use of purebred plants—for example, purebred white- and purebred purple-flowered peas—contribute to his understanding of inheritance? **TEKS 6F**
- How does the homozygous condition differ from the heterozygous condition? In your answer, use the terms *gene*, *homologous chromosome*, and *allele*.
- What does each of the following parts of a Punnett square represent: (a) the entries on each axis of the grid and (b) the entries in the four squares within the grid?
- How did the results of Mendel's dihybrid crosses lead him to formulate the law of independent assortment? **TEKS 3F, 6F**
- How does crossing over during meiosis I increase genetic diversity? **TEKS 6G**



READING TOOLBOX GREEK WORD ORIGINS

- The word *meiosis* comes from a Greek word meaning “to diminish,” or make less. How does this word's origin relate to its meaning?
- The word *haploid* comes from the Greek word *haplos*, which means “single.” The word *diploid* comes from the Greek word *diplos*, which means “double.” Explain how these two terms' meanings relate to their origins.
- The Greek prefix *homo-* means “one and the same.” How does this relate to the words *homologous* and *homozygous*?

Compare and Contrast

Describe one similarity and one difference between the two terms in each of the following pairs.

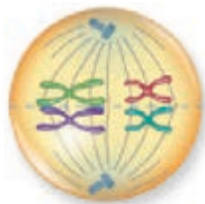
- monohybrid cross, dihybrid cross
- heterozygous, homozygous
- genotype, phenotype

Critical Thinking

- 21. Hypothesize** Could a mutation in one of an individual's somatic cells be passed on to the individual's offspring? Explain your answer.
- 22. Predict** Consider a species with a $2n$, or diploid, chromosome number of 4. If gametes were formed by mitosis, rather than meiosis, what would happen to the chromosome number of the offspring of these organisms over generations? Explain.
- 23. Contrast** Draw a pair of homologous chromosomes before and after duplication. Use your drawings to explain how homologous chromosomes and sister chromatids differ.
- 24. Synthesize** Mendel's law of independent assortment states that allele pairs separate independently of each other during meiosis. How does this law relate to crossing over and genetic linkage?
- 25. Infer** Imagine that you are studying the trait of flower petal shape in a species of plant. Petal shape is determined by a single gene with two alleles. You make a cross of two plants with unknown genotypes, both with smooth petals, and get the following F_1 offspring phenotypes: 23 wrinkled and 77 smooth. What conclusions can you draw about the inheritance of this trait? In your answer, include the probable genotypes of each parent, and indicate which allele is likely dominant.
- TEKS 6F**
- 26. Analyze** In a particular species of butterfly, the genes for two different traits, antenna shape and antenna color, are located on the same chromosome. As a result, crosses between these butterflies do not obey one of Mendel's laws. Which law does not apply, and why?

Interpreting Visuals

The drawing to the right shows a cell at a certain point during meiosis. Use the drawing to answer the next two questions.

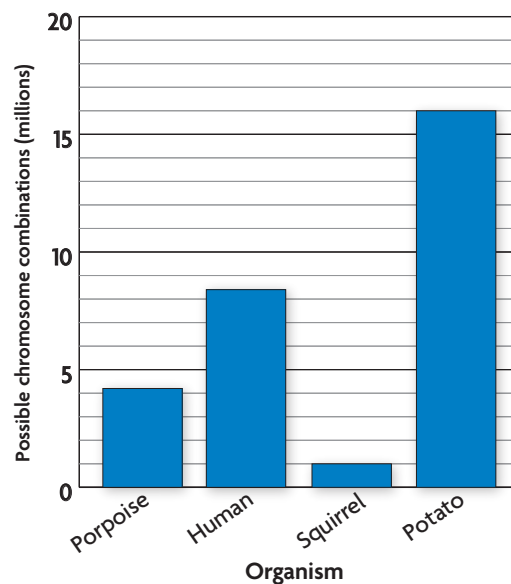


- 27. Identify** What stage of meiosis is shown above? Defend your answer.
- 28. Apply** Is the above cell diploid or haploid? Explain.

Analyzing Data Interpret a Bar Graph

During meiosis, pairs of homologous chromosomes separate independently of the others, and gametes receive one of the two chromosomes from each pair. The number of possible chromosome combinations for a species is 2^n , where n = the number of homologous pairs. The graph below shows the number of possible chromosome combinations for a variety of species. Use it to answer the next two questions.

POSSIBLE CHROMOSOME COMBINATIONS



Source: Rutgers University

- 29. Summarize** List the organisms in the above graph, in order, from least to most possible chromosome combinations.
- 30. Infer** What can you infer from the graph about the number of homologous chromosomes in squirrels compared with potatoes?

Making Connections

- 31. Write a Diary Entry** Put yourself in Mendel's shoes. It is the mid-1800s. DNA and genes have not been identified, and the mechanisms of heritability are not understood. Write a diary entry (or letter) about one of Mendel's crosses from his perspective. Describe the results of the cross and ideas that may have come from the results.
- 32. Synthesize** Look again at the picture of the egg and sperm cells on the chapter opener. Each of these sperm cells is genetically unique. What are the sources of variation that make each one different from the others?



Biology End-of-Course Exam Practice

Record your answers on a separate piece of paper.

MULTIPLE CHOICE

TEKS 6A

- 1 Researchers crossed two types of mice together, type A and type B. In the resulting offspring, half of the DNA for specifying traits comes from type A and half comes from type B. Why?
- A X-inactivation occurs with a 50/50 chance in each cell.
 - B The offspring get their DNA from the sperm and their cytoplasm from the egg.
 - C Each parent contributes one set of chromosomes to each offspring.
 - D The offspring make binary divisions during development.

TEKS 6G

- 2 Unlike cells that divide by mitosis, the gametes formed during meiosis undergo two cell divisions. What is the significance of this second cell division to sexual reproduction?
- A It ensures that offspring develop from cells that are identical to the parent cell.
 - B It ensures that all gametes formed are genetically identical to each other.
 - C It reduces the number of chromosomes in each resulting gamete by half.
 - D It provides a fertilized egg with twice as many chromosomes as were present in the parent organisms.

TEKS 6E

3



A mutation occurs in a gene on chromosome 3, which is shown above. This mutation could be passed along to offspring if it occurs —

- A in any cell except sex cells
- B after fertilization but before the zygote develops
- C during development of the zygote
- D in a sex cell that undergoes fertilization

TEKS 2G, 6F

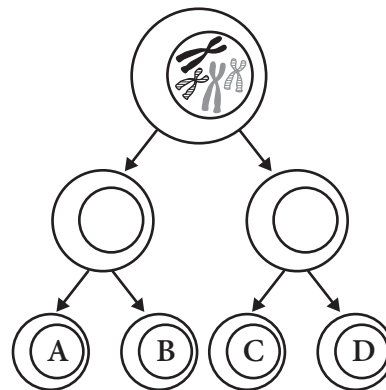
- 4 In peas, the gene for green pod color (G) is dominant to the gene for yellow pod color (g). The gene for round shaped peas (R) is dominant to wrinkled-shaped peas (r). If a plant that is homozygous dominant for both genes is crossed with a plant that is heterozygous for both genes, what is the probability that the offspring will have yellow pods and round peas?
- A 0
 - B $\frac{1}{4}$
 - C $\frac{1}{2}$
 - D $\frac{3}{4}$

THINK THROUGH THE QUESTION

If necessary, take the time to draw out a Punnett square to answer this question. The Gg and Rr genotypes are the same as the gG and rR genotypes.

TEKS 2G, 4B

5



If the process of meiosis shown here proceeds normally, how many chromosomes will cells A, B, C, and D have?

- A 2 each
- B 4 each
- C 6 each
- D 8 each